

Full Name _____

Age _____ Grade _____

First Grade Math

ADDITION:

$$\begin{array}{r} 1) \quad 1 \\ +3 \\ \hline \end{array}$$

$$\begin{array}{r} 2) \quad 4 \\ +8 \\ \hline \end{array}$$

$$\begin{array}{r} 3) \quad 6 \\ +7 \\ \hline \end{array}$$

$$\begin{array}{r} 4) \quad 3 \\ +8 \\ \hline \end{array}$$

$$\begin{array}{r} 5) \quad 5 \\ +9 \\ \hline \end{array}$$

$$\begin{array}{r} 6) \quad 8 \\ +5 \\ \hline \end{array}$$

$$\begin{array}{r} 7) \quad 6 \\ +1 \\ \hline \end{array}$$

$$\begin{array}{r} 8) \quad 4 \\ +6 \\ \hline \end{array}$$

$$\begin{array}{r} 9) \quad 2 \\ +0 \\ \hline \end{array}$$

$$\begin{array}{r} 10) \quad 1 \\ +4 \\ \hline \end{array}$$

$$\begin{array}{r} 11) \quad 3 \\ +5 \\ \hline \end{array}$$

$$\begin{array}{r} 12) \quad 9 \\ +3 \\ \hline \end{array}$$

$$\begin{array}{r} 13) \quad 6 \\ +3 \\ \hline \end{array}$$

$$\begin{array}{r} 14) \quad 1 \\ +3 \\ \hline \end{array}$$

$$\begin{array}{r} 15) \quad 9 \\ +8 \\ \hline \end{array}$$

SUBTRACTION:

$$\begin{array}{r} 16) \quad 2 \\ -1 \\ \hline \end{array}$$

$$\begin{array}{r} 17) \quad 8 \\ -6 \\ \hline \end{array}$$

$$\begin{array}{r} 18) \quad 5 \\ -5 \\ \hline \end{array}$$

$$\begin{array}{r} 19) \quad 7 \\ -3 \\ \hline \end{array}$$

$$\begin{array}{r} 20) \quad 6 \\ -3 \\ \hline \end{array}$$

$$\begin{array}{r} 21) \quad 4 \\ -3 \\ \hline \end{array}$$

$$\begin{array}{r} 22) \quad 9 \\ -1 \\ \hline \end{array}$$

$$\begin{array}{r} 23) \quad 31 \\ -10 \\ \hline \end{array}$$

$$\begin{array}{r} 24) \quad 8 \\ -1 \\ \hline \end{array}$$

$$\begin{array}{r} 25) \quad 7 \\ -5 \\ \hline \end{array}$$

Email your answers to lacarileadershipcenter@gmail.com

26) $\begin{array}{r} 1 \\ -1 \\ \hline \end{array}$ 27) $\begin{array}{r} 3 \\ -2 \\ \hline \end{array}$ 28) $\begin{array}{r} 8 \\ -3 \\ \hline \end{array}$ 29) $\begin{array}{r} 9 \\ -2 \\ \hline \end{array}$ 30) $\begin{array}{r} 7 \\ -4 \\ \hline \end{array}$

Fill in the square with the correct number.


Sample: $3 + \boxed{1} = 4$

31) $1 + \boxed{} = 10$ 32) $6 + \boxed{} = 8$ 33) $2 + \boxed{} = 5$

34) $8 + \boxed{} = 13$ 35) $3 + \boxed{} = 10$ 36) $4 - \boxed{} = 2$


37) $9 - \boxed{} = 6$ 38) $5 - \boxed{} = 3$ 39) $7 - \boxed{} = 4$

40)



How many planes? _____

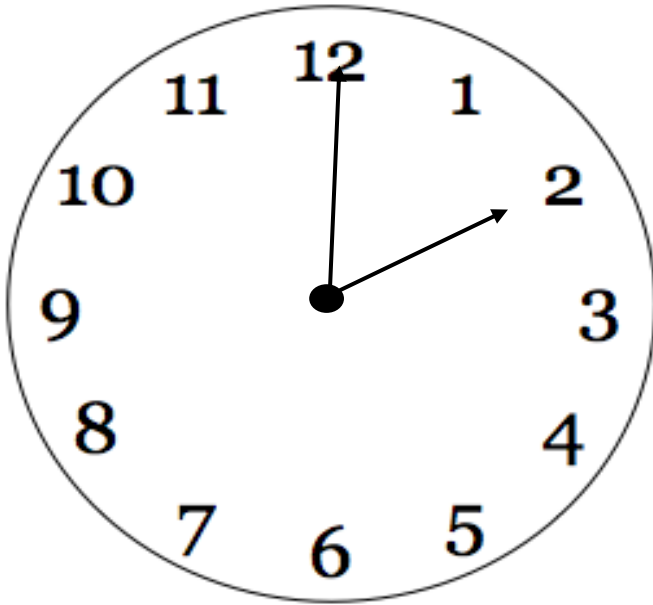
41)



How many balloons? _____

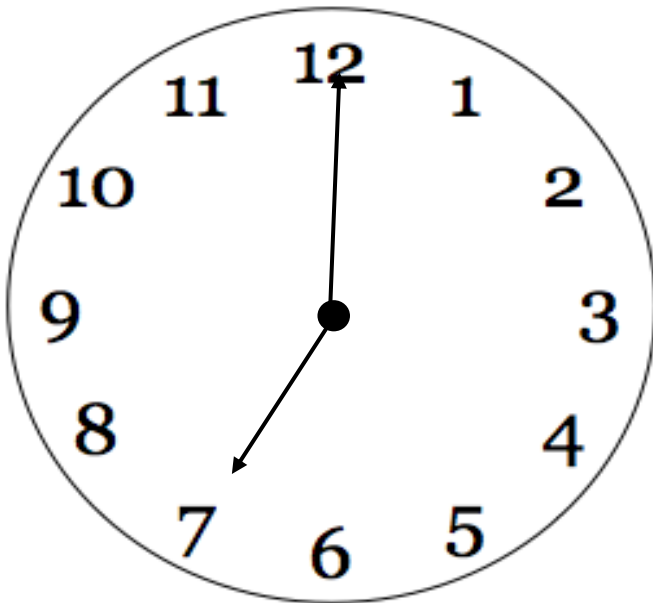
Full Name _____

Age _____ Grade _____



42) What time is it?

[This Photo](#) by Unknown Author is licensed under [CC BY-SA](#)



43) What time is it?

[This Photo](#) by Unknown Author is licensed under [CC BY-SA](#)

Email your answers to lacarileadershipcenter@gmail.com